


Q.1 How many faces do you see in the picture?



- Options :
- a. 08
 - b. 09
 - c. 10
 - d. 05

• Chosen Option : b

• Correct Answer : a = 12 marks, b = 17 marks, d = 07 marks

Q.2 Identify the four most important visual principles in the given two dimensional black and white composition



- Options :
- a. Repetition
 - b. Parallelism
 - c. Radiation
 - d. Distortion
 - e. Hierarchy
 - f. Vibration
 - g. Symmetry
 - h. Continuity
 - i. Direction
 - j. Variety
 - k. Dynamic
 - l. Convergence
 - m. Contrast
 - n. Delicateness
 - o. Complexity
 - p. Flow

• Chosen Option : a,j,m,p

• Correct Answer : a,c,j,k,l,p

Q.3 Identify the four most important visual principles in the given two dimensional black and white composition



- Options :
- a. Repetition
 - b. Parallelism
 - c. Radiation
 - d. Symmetry
 - e. 3D Effect
 - f. Movement
 - g. Rhythm
 - h. Hierarchy
 - i. Order
 - j. Flow
 - k. Direction
 - l. Gradation
 - m. Play of background & foreground
 - n. Contrast
 - o. Complexity
 - p. Focal Point

• Chosen Option : a,j,k,o

• Correct Answer : a,b,e,f,j,n

Q.4 Identify the four most important visual principles in the given two dimensional black and white composition

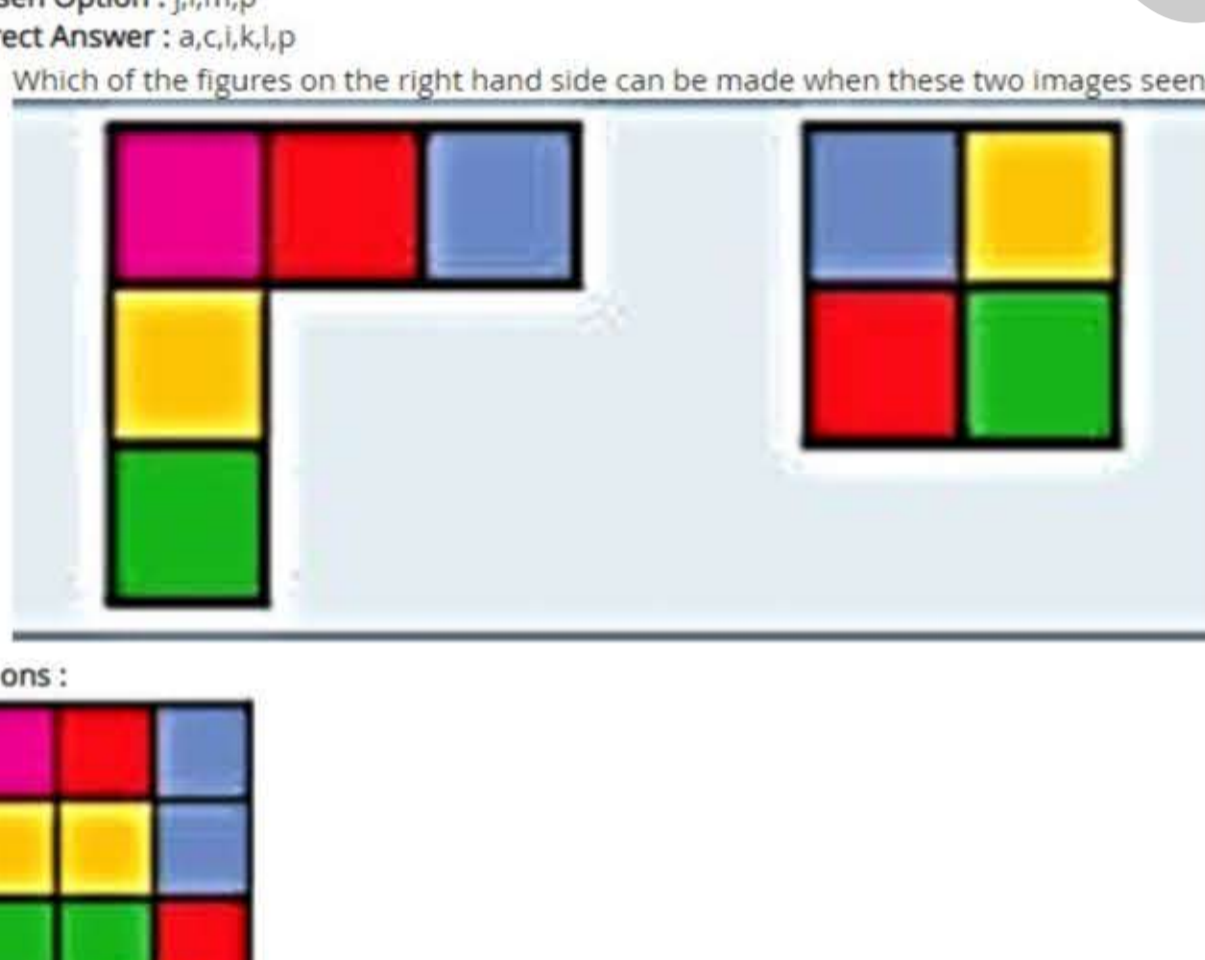


- Options :
- a. Parallelism
 - b. Radiation
 - c. 3D Effect
 - d. Hierarchy
 - e. Order
 - f. Symmetry
 - g. Datum
 - h. Continuity
 - i. Movement
 - j. Vibration
 - k. Convergence
 - l. Rhythm
 - m. Delicateness
 - n. Focal point
 - o. Contrast
 - p. Direction

• Chosen Option : j,l,m,p

• Correct Answer : a,c,i,k,l,p

Q.5 Which of the figures on the right hand side can be made when these two images seen below are fitted in together



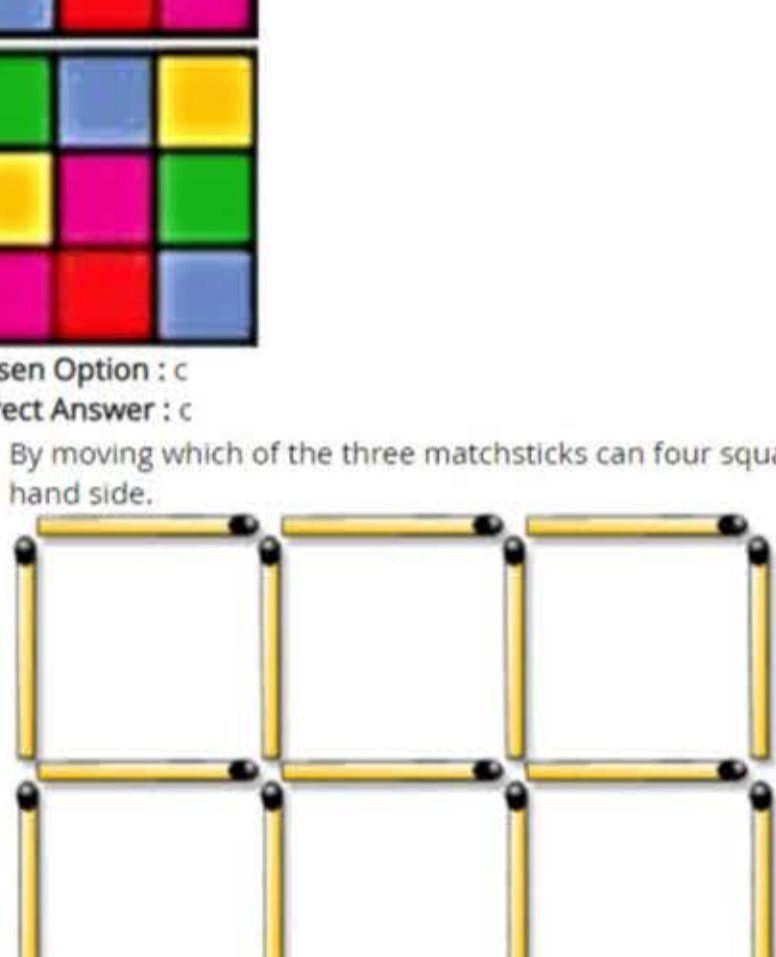
- Options :

- a.
- b.
- c.
- d.

• Chosen Option : c

• Correct Answer : c

Q.6 By moving which of the three matchsticks can four squares be derived from the five squares? Select from the options given on the right hand side.



- Options :

- a. Bottom left corner two and middle row center matchstick.
- b. Middle row three matchsticks
- c. Top right corner two
- d. Three vertical matchsticks from the center

• Chosen Option : b

• Correct Answer : c

Q.7 What is it called when our eyes are exposed to similar shades of a colour as indicated in the image below for some time?



- Options :

- a. Colour washing
- b. Colour flowing
- c. Colour blinding
- d. Colour mixing

• Chosen Option : d

• Correct Answer : a

Q.8 Colors change their character if they are surrounded by different colors. What is that effect called as? Which one colour scheme on right hand side resembles left hand side mural?



- Options :

- a. BezOS
- b. Bezold
- c. Bezubban
- d. Bezonimic

• Chosen Option : a

• Correct Answer : b

Q.9 Which color scheme on the right hand side matches the color scheme of the composition on the left hand side?



- Options :

- a.
- b.
- c.
- d.

• Chosen Option : b

• Correct Answer : c

Q.10 Which one of the black and white compositions on right hand side resembles left hand side coloured composition ?



- Options :

- a.
- b.
- c.
- d.

• Chosen Option : c

• Correct Answer : b